

Prezident Maktablariga Kirish Imtihoni Uchun Sinov Testi

6-7 Sinflar Uchun

- **Masala yechish**
- **Tanqidiy Fikrlash**
 - **Ingliz tili**

Test Tuzuvchi: Yusuf Mirjonov

Urganch 2019

Test B: Masala yechish

1. Quyidagi ketma-ketlikdagi so'roq belgisi o'rnida qaysi son keladi.

1, 2, 6, __?__, 120, 720

A 60 B 24 C 90 D 30 E 36

2. Hozir Robiya 34 yoshda va qizi bo'lsa 8 yoshda. Necha yildan so'ng Robiya qizidan roppa rosa ikki marta katta bo'ladi.

A 10 B 14 C 18 D 22 E 26

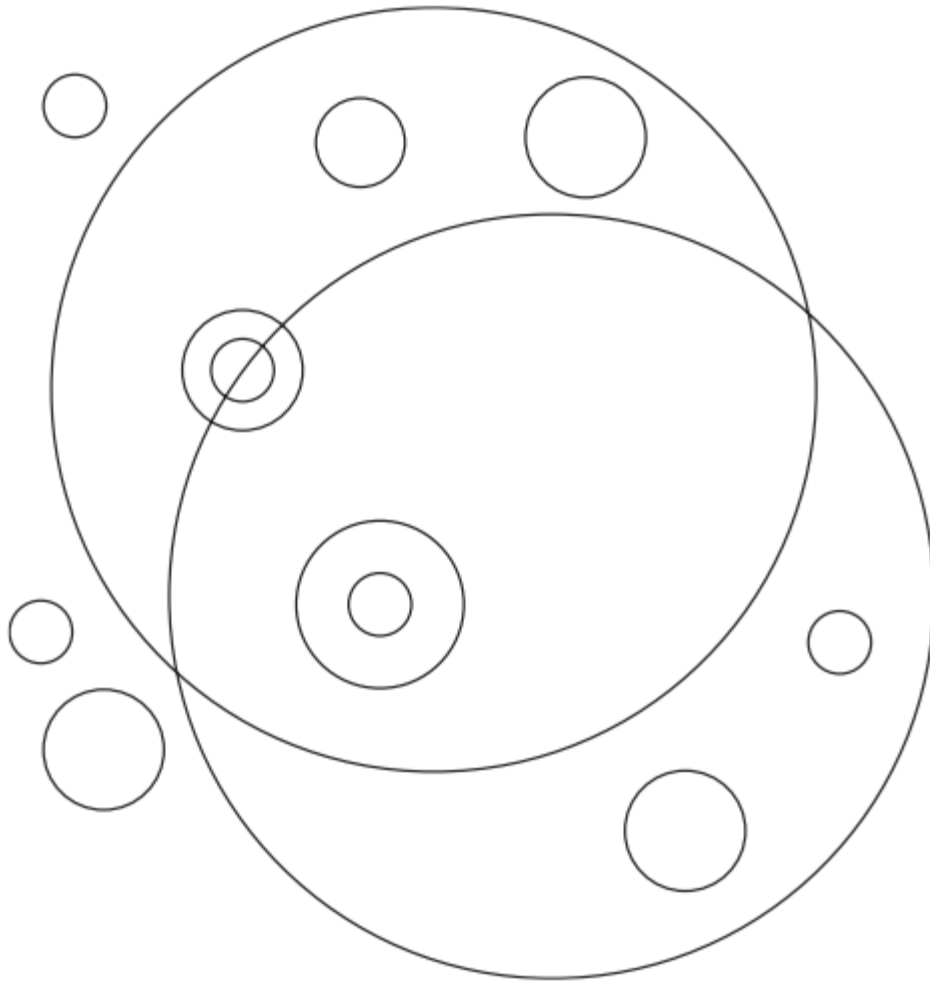
3. $2^3 * 3^4 * 5^5$ Ushbu sonning bo'luvchilaridan nechitasi toq son.

A. 20 B. 30 C. 90 D. 100 E. 120

4. Fermer o'z dalasining shimoliy tarafiga sim to'siq qurib chiqdi. U har 7 mertdan bir to'sin qo'yib bordi. Agar u jami 100 to'sin ishlatgan bo'lsa, jami sim to'siqning uzunligini toping.

A. 686 B. 693 C. 700 D. 707 E. 770

5. Nechta har hil kattalikdagi aylana mavjud.



A 5

B 4

C 6

D 7

E 3

6. Soat ko'rsatkichlari Rim raqamlarida belgilangan. Minut strelkasi 12 ga 24 minut qolganini ko'rsatib turibdi. Minut strelkasing ayni pastda qaysi Rim raqami ustida turganini toping.

A V

B VI

C VII

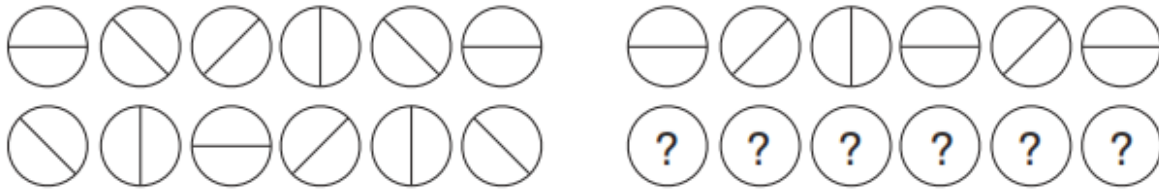
D VIII

E IX

7. Tuflining narxi darstlab 20 % oshdi, malum vahtdan keyin u yana 25 % foiz qimmatladi. Jami tugli dastlabki bahosiga ko'ra necha foiz qimmatladi.

- A 45 B 35 C 40 D 60 E 50

8.




So'roq belgilar o'rnida qaysi shakllar keladi?

- A
- B
- C
- D
- E

9. Uchta sonning o'rta arifmetigi 19. Shu sonlardan ikkitasinging orta arifmetigi 24 bo'lsa, uchunchi sonni toping.

- A 5 B 43 C 9 D 15 E 12

10. So'roq belgisi o'rnida qaysi son keladi?



A 37

B 27

C 32

D 17

E 26

11. Sinfda 28 o'quvchi bor. Shulardan 19 tasi Ingliz tilini, 15 tasi Rus tilini biladi. Agar sinftad hamma shu ikki tildan kamida bittasini biladigan bo'lsa, ikkala tilni biladiganlar nechta?

A 6

B 8

C 10

D 9

E 14

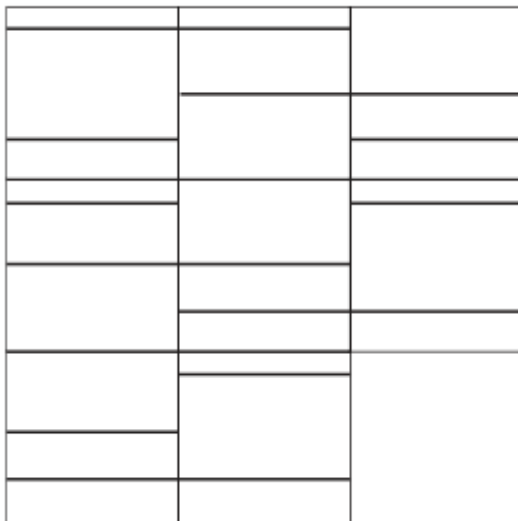
12. Oilda, Ota tortning $\frac{1}{4}$ qismini oldi. U qolgan har bir oila a'zosiga nisbatan 3 marta ko'p hissa olgan bo'lsa, oilada nechta adam bor?

- A** 3 **B** 7 **C** 10 **D** 12

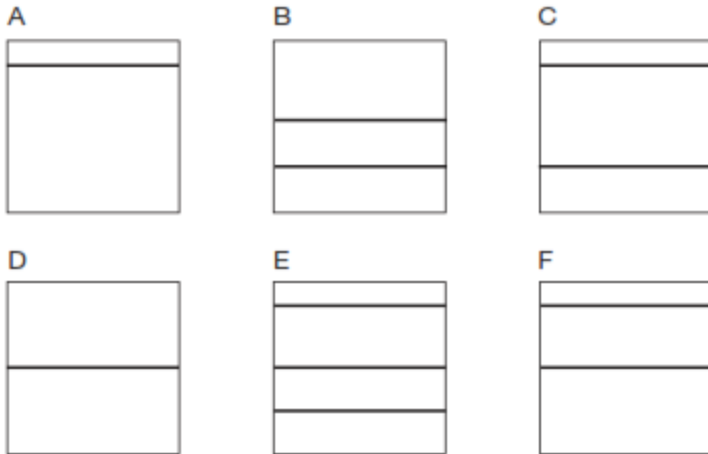
13. 144 ning $\frac{30}{45}$ qismining $\frac{19}{57}$ qismining 12.5% ning $\frac{17}{68}$ qismini toping.

- A** $\frac{19}{64}$ **B** $\frac{17}{32}$ **C** $\frac{8}{45}$ **D** $\frac{16}{57}$ **E** 1

14.



Oxirgi qo'yiladigan kafel bo'lagini toping.



15. Quyidagi jadval ma'lum kundagi spektaklga chipta sotilishini ko'rsatadi. Bir kundagi chipta sotishdan kelgan eng katta va eng kichik daromad orasidagi farqni toping.

Spektakl vahti	Chipta narxi	Sotilgan chiptalar soni
Seshanba kechqurun	\$40	200
Juma kechqurun	\$50	240
Shanba tushlik	\$40	220
Shanba tushlik	\$50	300

- A. \$4,000
- B. \$5,100
- C. \$6,200
- D. \$7,000

Test B: Tanqidiy fikrlash

Umar sahnaga chiqib qo'shiq aytish oldidan juda hayajonlandi. U kuylab boshlagan sari, tomoshabinlar ichidagi talabalar kulib boshlashdi. Umar buni eshitib yanada balandroq kuylashda davom qildi. U kuylashni tamomlaganda deyarli hamma kulayotgan edi. Muzika to'htadi va Umar tabassum bilan tazim qildi. Sahna pardasi yopilganda Umarning ustozini peshonasidagi terini artib, Umarni bag'riga bosdi. Umar ham kuylab bo'lganidan juda hursand edi. U uyiga borganda, ota-onasiga tomoshaninlar uning qo'shig'ini yoqtirganini aytdi.

1. Yuqoridagi hikoyaga asosan, quyidagilardan qaysi birisi **KATTA EHTIMOLLIK** bilan to'g'ri bo'ladi?

- A Umarning ustozini uniga achindi.
- B Umarning ota-onasi Umardan faxrlandi.
- C Umar yaxshi kuylay olmaydi.
- D Umar sho'x –kulguli qo'shiq kuyladi.

2. Yuqorida hikoyaga asoslanib, qaysi biri Umarning baland ovozda kuylaganiga **ENG KAM** sabab boladi.

A U talabarani yaxshi eshitsin deb shunday qildi.

B U qoshingni eng muhim joyiga kelgandi.

C Umar o'zidan kulayotgan talabalarga e'tibor bermayotgandi.

D U kuylagan sari hayajoni bosilayotgandi.

3. Quyidagi oylar ma'lum bir mantiqqa asoslanib ketma-ket kelgan. So'roq belgisi o'rnida qaysi oy keladi?

Yanvar

Fevral

April

Iyun

Noyabr

April

___?___

A Iyun

B Sentyabr

C Oktyabr

D Noyabr

E Dekabr

4. ' **BOLTA – CHOPMOQ**' manashu aloqadorlikdan kelib chiqib shunga o'xshashini toping.

A Klyuch – bolg'alach

B qoshiq – o'tkirlash

C sochiq – namlash

D tarozi – o'lchash

E eshik - ochish

5. **BADG, DBDF, FCDE, HDDD, ___?___**

So'roq belgisi o'rnida qaysi harflar keladi?

A JCDC

B IEDE

C KEDD

D GHDC

E JEDC

6. Agar quyidagi gaplardan, birinchi va ikkinchisi to'g'ri bo'lsa, uchinchi gap To'g'rimi, Xatomi yoki Aytish imkonsizmi.

1. Orkestrning hamma a'zolari konsertga qatnashdi.

2. Jamol konsertga qatnashdi.

3. Jamo orkestr a'zosi.

A To'g'ri

B Xato

C Aytish imkonsiz

7. Quyidagi juftliklardan nechtasi aynan bir hil.

Greenway Financial

Greenway Financial

Robertson Dental Supply

Robertson Dental Suply

Vintage Design Co

Vintage Design Co.

Jonestown Hardware

Jonestown Hardware

Firestone Insurance

Firestone Insurance

A 1

B 2

C 3

D 4

E 5

8."Men honani chiroqini yoqaolmayman."

Quyidagilardan qaysi biri manashu holat uchun sabab bo'laolmaydi?

A Mahallada elekt ta'minoti o'chgan.

B Elekt tizimi uyga ulanmagan.

C Biz yangi boshqacha rangdagi lampochka oldik.

D Patron kuygan ekan.

9. Quyidagi gapda qanday mantiqiy fikrlash xatoligi bor. "Uning dalillariga qanday ishonish mumkin? Ahir u firibgarlik bilan qamalib chiqqanku?"

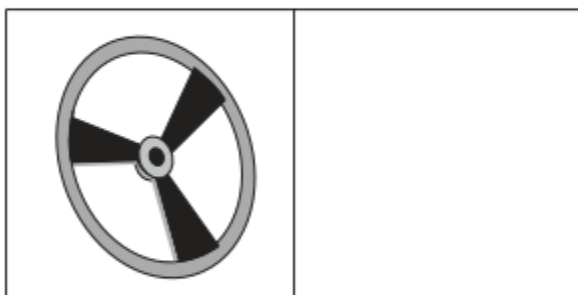
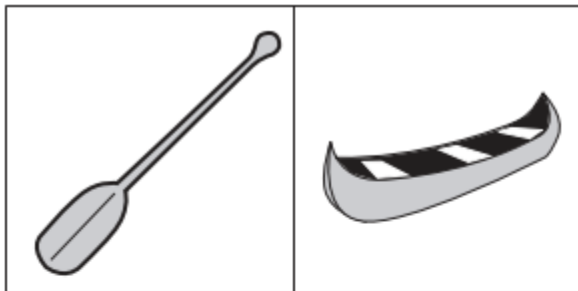
A Dalil keltirayotgan odamning qamalib chiqqanligi, u aldayotganini bildirmasligi mumkin.

B Qamalib chiqqanlar sudda guvuhlik berolmaydilar.

C Shu gaoni aytayorgan odam dalil keltirgan odamga nisbatan asossiz notog'ri fikri bor.

D Bu gapirayotgan odam qonunshunoslik maktabida o'qimagan.

10. Yuqoridagi ikkita rasm aloqasidan foydalanib, bo'sh katak o'rnidagi rasmni toping.



a.



b.



c.



d.

11. Quyidagi so'zlar kodlangan tildan olingan. Shundan kelib chiqib 'statement' so'zini kodlangan tildagi shaklini toping.

Daftafoni - *advisement* degani

Imodafta – *misadvice* degani

Imolokti – *misconduct* degani

A kratafoni **B** kratadafta **C** loktifoni **D** daftaimo

12. Bogot tumanidagi ko'lda suv doimo ifloslanib bormoqda. Chunki ko'lga juda ko'p sayyohlar kelishadi. Tuman hokimiyati buni eng zo'r yechimi sayyohlarga qo'shimcha to'lov undirish degan qarorga kelishdi.

Bu qarorga kelishda, hokimiyat quyidagi qaysi fikrni hisobga olib qaror qilidi.

A Global temperaturani o'zgarishi ko'l temperaturasiga ta'sir qildi.

B Katta to'lov qildirish sayyohlarni to'htatib qololmaydi.

C Ko'l sathi o'n yildan beri yiliga 20 santimetr kamayib kelmoqda.

D Ko'l hududida dam olish hech qachon taqiqlanmagan.

E Qo'shimcha to'lov juda ko'p odamlar kelishini oldini oladi.

13. Dehqonlar ko'proq guruch hosili olish uchun yangi GULHAN degan urug'ni kashf qilishdi. O'tgan yil shu urug' ekilgan dalalar 20 % ko'proq hosil berdi. Bu shuni ko'rsatdiki yangi urug' haqiqatdan ham boshqalardan hosildorroq ekan.

Quyidagi ma'lumotlardan qaysi biri ushbu hulosani asossiz ekanligini taminlaydi.

A Boshqa urug' ekilgan maydonlarda hosil o'sish kuzatilmadi.

B Hamma maydonlarga bir hil suv berilgan.

C Yangi urug' ekilgan maydonlarga boshqlardan ko'proq o'g'it berildi

D Hamma maydonlarda hosil bir hil kombaynlarda o'rildi.

14.

1. Mara Gaildan ko'ra tezroq yuguradi.

2. Lily Maradan ko'ra tezroq yuguradi.

3. Gail Lily dan ko'ra tezroq yuguradi.

Agar birinchi va ikkinchi gaplar to'g'ri bolsa, uchinchi gap

A To'g'ri

B Xato

C Aniqlab bo'lmaydi

15. Kinolardagi urushli sahnalar ohirgi 10 yil ichida keskin ko'paydi. Jamiyatni zo'ravonlik va jinoyatdan asrash uchun hukumat kinolardagi urushli sahnalarni taqiqlash kerak.

Bu hulosaga kelishda yana qaysi gapga suyanilgan

A Kinoda urushli sahna ko'rish jamiyatda zo'ravonlikni ko'paytiradi

B Ohirgi 5 yilda, jinoyat ko'paydi.

C Kino sanoati buni oldini olishga qattiq harakat qiladi.

D Ohirgi 10 yilda hamma kinoda urushli holat mavjud.

Test B: Problem Solving

1. Find the number that replaces the question mark in the number set.

1, 2, 6, __?__, 120, 720

A 60 B 24 C 90 D 30 E 36

2. Today Robiya, who is 24 years old, and her daughter, who is 8 years old, celebrate their birthdays. How many years will pass before Robiya's age is twice her daughter's age.

A 10 B 14 C 18 D 22 E 26

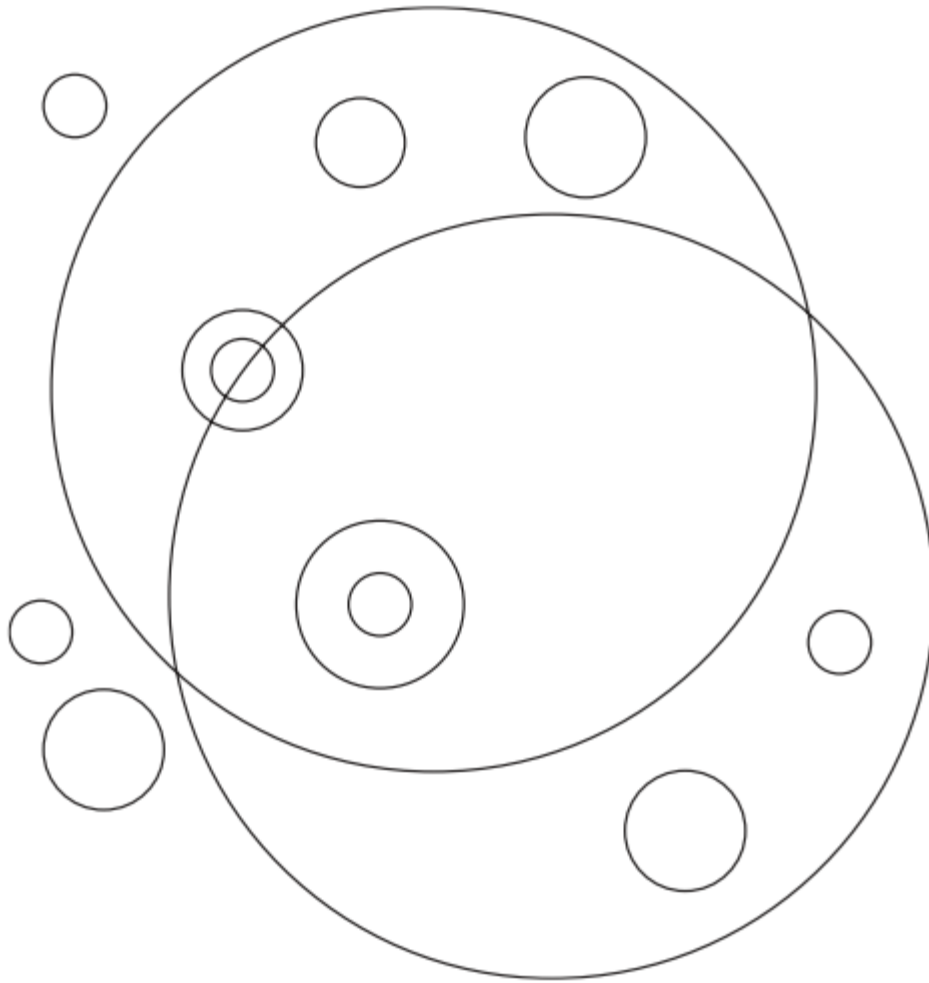
3. How many factors of $2^3 * 3^4 * 5^5$ are odd numbers?

A. 20 B. 30 C. 90 D. 100 E. 120

4. A farmer constructs a fence along the northern edge of his property, using materials such that he places a post every 7 meters. if he uses 100 posts, how many meters will the fence span?

A. 686 B. 693 C. 700 D. 707 E. 770

5. How many different sized circles are available?



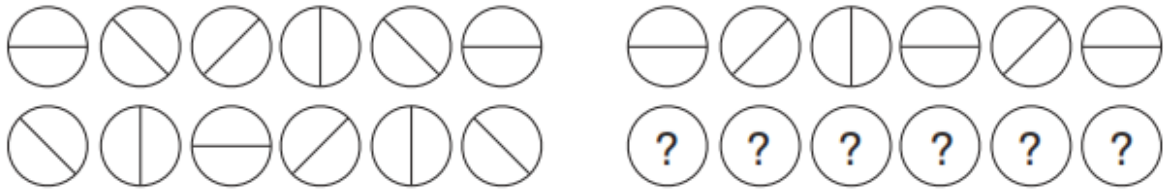
6. The clock is scaled with Roman numbers. When the time is 24 minutes to midnight, which Roman number does minute arrow show?

A V B VI C VII D VIII E IX






7. The price of shoes rose by 20 % and then again 25% later. What percentage has it been more expensive from the first price?

A 45 B 35 C 40 D 60 E 50

8.




Which set of symbols should replace the question marks?

- A 
- B 
- C 
- D 
- E 

9. The average of three numbers is 19. The average of two of these numbers is 24. What is the third number?

- A** 5 **B** 43 **C** 9 **D** 15 **E** 12

10. What number should replace the question mark?



11. In class there are 28 students. Of those 19 students know English and 15 ones know Russian. If every student knows at least one of the two languages, how many students know both languages?

A 6 B 8 C 10 D 9 E 14

12. In a family, the father took $\frac{1}{4}$ of the cake and he had 3 times as much as each of the other members had. The total number of family members are.

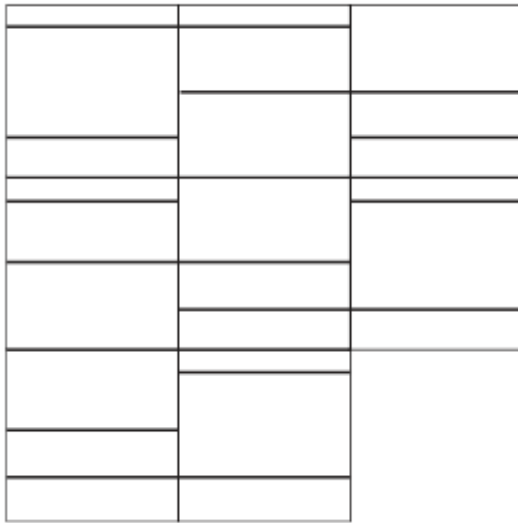
A 3 B 7 C 10 D 12

13. Find following.



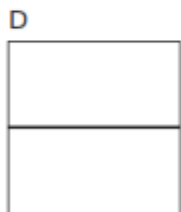
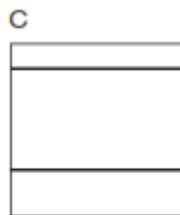


$$\frac{17}{68} \text{ of } 12.5\% \text{ of } \frac{19}{57} \text{ of } \frac{30}{45} \text{ of } 144$$

- A $\frac{19}{64}$ B $\frac{17}{32}$ C $\frac{8}{45}$ D $\frac{16}{57}$ E 1

14.



Find the last tile.



15. The table shows a summary of the ticket sales from four performances of a certain play. What is the difference between the maximum and the minimum ticket-sale revenue from a single performance?

Performance Time	Ticket Price	Number of Tickets Sold
Thursday night	\$40	200
Friday night	\$50	240
Saturday afternoon	\$40	220
Saturday night	\$50	300

- A. \$4,000
- B. \$5,100
- C. \$6,200
- D. \$7,000

Test B: Critical Thinking

1. Umar was nervous as she stood on the stage before her performance. As she sang, the students in the audience began to laugh. Umar heard the laughing and sang even louder. By the time she had finished her song, almost everyone was laughing. The music stopped, and Umar smiled and bowed. As the curtain closed, Umar's teacher wiped away tears and gave Umar a big hug. Umar was glad her song was finished. When she got home, Umar told her parents that the audience had loved her song.

Based on the story, what is **MOST LIKELY** to be true?

- A Umar's teacher felt sorry for her.
- B Umar's parents were proud of her.
- C Umar is a bad singer.
- D Umar sang a funny song.

2. According to the story above, which is the least likely reason for Umar to rise his voice when singing?

- A She wanted the students to be able to hear the song.
- B She had reached the most important part of the song.
- C She was ignoring the students who were making fun of her.
- D She had become less nervous as she sang.

3. Below months flow base on a special logic. Which month replace the question mark?

January

February

April

July

November

April

___?___

A July **B** September **C** October **D** November **E** December

4. '**AXE – TO CHOP**'. Find the analogy like this pair.

A Wrench – to hammer

B Spoon – to sharp

C Towel – to wet

D Scale – to weigh

E Door – to open

5. **BADG, DBDF, FCDE, HDDD, __?__**

Which set of letters comes the next?

A JCDC B IEDE C KEDD D GHDC E JEDC

6. If the first and second sentences are true, what can you tell about the third sentence; True, False or Can't tell.

1. All members of the orchestra attended the concert.
2. Jamol attended the concert
3. Jamol is the member of orchestra.

A True B False C Can't tell

<i>7. Greenway Financial</i>	<i>Greenway Financial</i>
<i>Robertson Dental Supply</i>	<i>Robertson Dental Suply</i>
<i>Vintage Design Co</i>	<i>Vintage Design Co.</i>
<i>Jonestown Hardware</i>	<i>Jonestown Hardware</i>
<i>Firestone Insurance</i>	<i>Firestone Insurance</i>

How many of five items in the left hand column are exactly the same as the corresponding entry in the right hand column?

A 1 B 2 C 3 D 4 E 5

8. "I can't switch on the light in the room." Which one cannot be the cause of the situation?

A There is failure in electricity in neighborhood.

B Lighting system has not installed in the house yet.

C We have bought new different colour bulb.

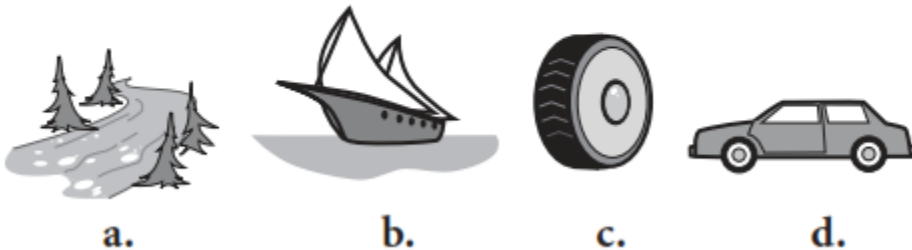

D The light bulb in the lamp has burned out.

9.

What is wrong with the logic of the following statement? *"How can you believe his testimony? He is a convicted felon!"*

- a. The fact that the person testifying was convicted of a crime does not mean he is lying.
- b. A convicted felon cannot testify in court.
- c. The person speaking has a bias against criminals.
- d. The person speaking obviously did not attend law school.

10. Using analogy in the following pictures, find the appropriate picture for empty place.



11. Here are some words translated from an artificial language. Which word could mean 'statement'?

Daftafoni - means *advisement*

Imodafta - means *misadvice*

Imolokti - means *misconduct*

A kratafoni

B kratadafta

C loktifoni

D daftaimo

12. Bogot District lakes have been experiencing a constant deterioration in water quality due to too many visitors. Therefore, Bogot Admistration Council has decided that the best way to save its lakes is by charging an extra fee to users of the lakes.

Which of the following is an assumption underlying the conclusion?

A Changing global temperatures has been shown to be mostly responsible for the lakes' deterioration.

B It is clear that charging higher fees will not be enough to stop the destruction of the lakes.

C The level of the lakes in Country Casa has fallen by 20 centimeters per year over the last decade.

D Camping at the lakes has never been prohibited.

E Higher fees would actually deter a significant amount of people from visiting the lakes.

13. Farmers have invented a new rice seed GULHAN in order to increase the crop. Last year fields where the seeds were sown gave 20 % more crop. This shows this seed is more productive than the others.

A There have not been an increase in the crops of the other types of seeds.

B All fields have been watered equally.

C The areas with new invented seeds received more fertilizers than the others.

D All fields have been cropped by the same combine.

14. If the first two statements are true, the third statement is

- 1.** Mara runs faster than Gail.
- 2.** Lily runs faster than Mara.
- 3.** Gail runs faster than Lily.

A true **B** false **C** uncertain

15. The amount of violence in films has increased significantly over the past 10 years. To prevent our society from becoming more violent, Congress should pass a law limiting movie violence.

The argument above relies on which of the following assumptions?

- A.** Watching violence in films encourages real life violence.
- B.** Over the past 5 years, crime rates have risen.
- C.** The movie industry will do its best to prevent such legislation.
- D.** Every film made in the last 10 years includes violent scenes.
- E.** The number of sex scenes has also increased significantly over the past 10 years.

Test B: English

1. I _____ to the news on the radio when the phone _____.

- A)** listened / was ringing **B)** am listening / was ringing
C) was listening / rang **D)** listen / is ringing

2. Would _____ please explain what happened?

- A)** anything **B)** somewhere **C)** anybody **D)** someone

3. "I feel nervous. I've got an exam today."

" _____ "

A) Cheer up! Things can't be that bad! **B)** That's great. Have a good time.

C) Poor you! That happens to me sometimes. **D)** Good luck! Do your best.

4. I called Tom at 10.00 in the morning, but he was _____ in bed.

- A)** of course **B)** still **C)** only **D)** especially

5. You _____ come with me if you don't want to. I'll go on my own.

- A)** don't have to **B)** must **C)** should **D)** shouldn't

6. I'm sorry you are leaving. I _____ when you _____.

- A)** am glad / you are back **B)** glad / will be back
C) will be glad / are back **D)** am glad / will be back

7. I like to relax _____ I'm on holiday.

- A)** while **B)** before **C)** during **D)** as soon as

8. Stop at a petrol station _____ we run out of the petrol.

A) before B) until C) after D) when

We __**(9)**__ gardening very much, but we __**(10)**__ time to do anything in the garden yet. And it __**(11)**__ very heavily recently, so we'll just wait till the weather gets better.

9. **A) are liking B) liked C) have liked D) like**

10. **A) don't have B) haven't had C) had not D) aren't having**

11. **A) is raining B) rained C) have been raining D) has rained**

12. The spade is a gardening _____.

A) instrument B) machine C) tool D) weapon

13. _____ ! (Be careful) There is a car coming!

A) look at B) look out C) hold up D) keep up

14. I ___ home for lunch on Mondays. I have lunch in the canteen.

A) didn't go B) don't go C) doesn't go D) will not go

15. Don't worry. I'll do ___ best to help ___ .

A) my/you B) your/you C) his/him D) -/to you

Problem Solving

1	2	3	4	5	6	7	8	9	10	11	12	13	14	15
B	C	B	B	A	C	E	A	E	E	A	D	E	F	D

Critical Thinking

1	2	3	4	5	6	7	8	9	10	11	12	13	14	15
D	C	C	D	E	C	C	D	A	D	A	E	C	B	A

English

1	2	3	4	5	6	7	8	9	10	11	12	13	14	15
C	B	B	C	C	C	D	B	A	C	C	A	A	D	B